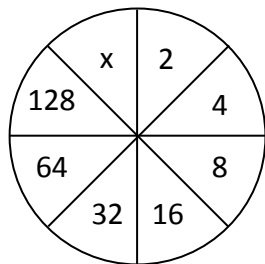


# Zahlenkreise - Lösung



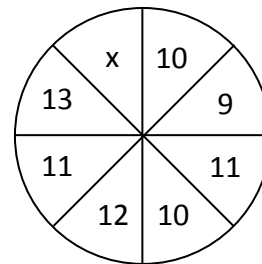
Tragen Sie bei den untenstehenden Zahlenkreisen die fehlenden Zahlen ein:

1.



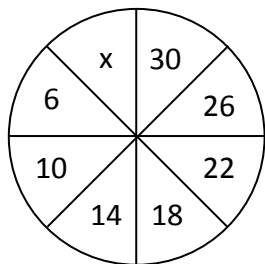
$x = 256$

5.



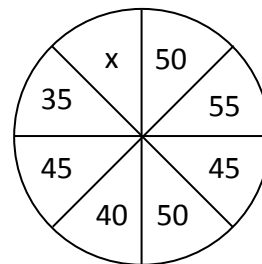
$x = 12$

2.



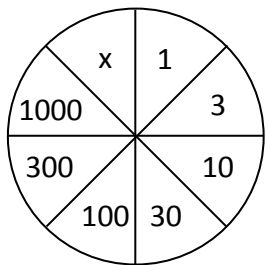
$x = 2$

6.



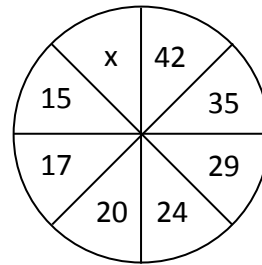
$x = 40$

3.



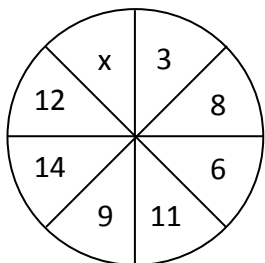
$x = 3000$

7.



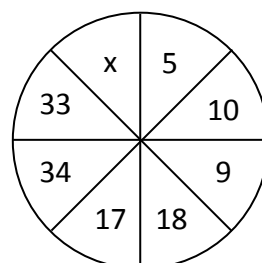
$x = 14$

4.



$x = 17$

8.



$x = 66$

